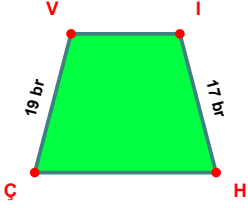
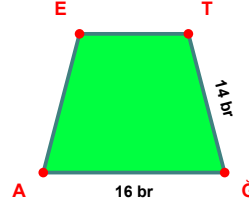


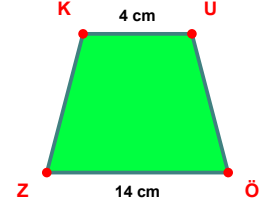
SORU: Aşağıdaki şekillerde verilen, kenar uzunlukları farklarını bulunuz.



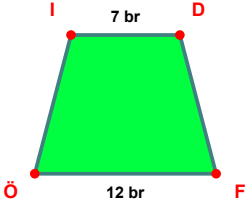
$$|ÇV| - |IH| = \dots\dots$$



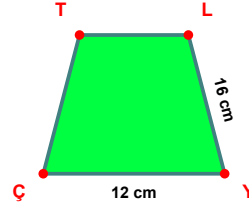
$$|ĞA| - |TĞ| = \dots\dots$$



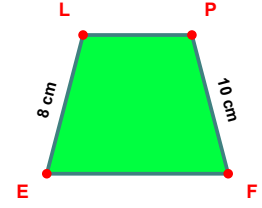
$$|ÖZ| - |KU| = \dots\dots$$



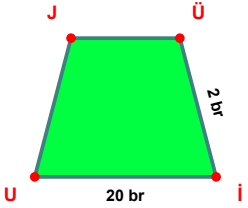
$$|FÖ| - |ID| = \dots\dots$$



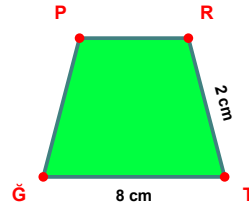
$$|LY| - |YÇ| = \dots\dots$$



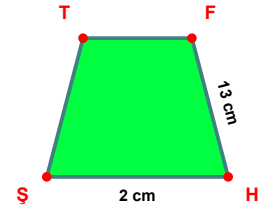
$$|PF| - |EL| = \dots\dots$$



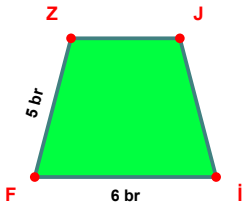
$$|IU| - |Üİ| = \dots\dots$$



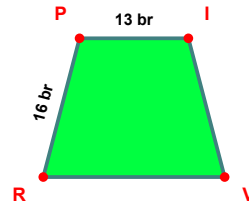
$$|TĞ| - |RT| = \dots\dots$$



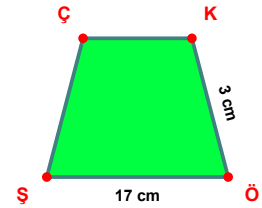
$$|FH| - |HŞ| = \dots\dots$$



$$|İF| - |FZ| = \dots\dots$$

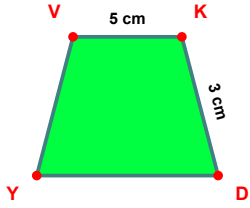


$$|RP| - |Pİ| = \dots\dots$$

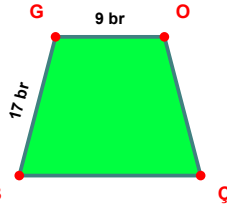


$$|ÖŞ| - |KÖ| = \dots\dots$$

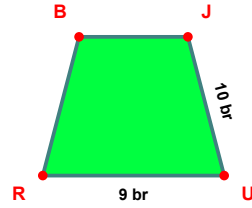
SORU: Aşağıdaki şekillerde verilen, kenar uzunlukları farklarını bulunuz.



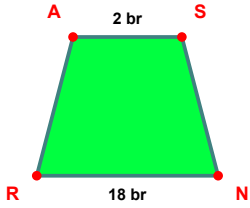
$$|VK| - |KD| = \dots\dots\dots$$



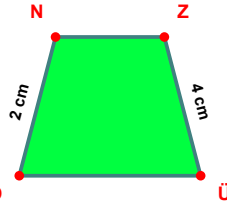
$$|BG| - |GO| = \dots\dots\dots$$



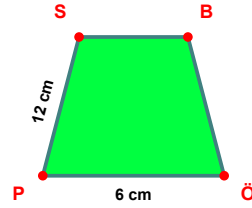
$$|JU| - |UR| = \dots\dots\dots$$



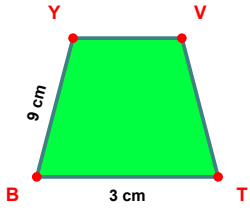
$$|NR| - |AS| = \dots\dots\dots$$



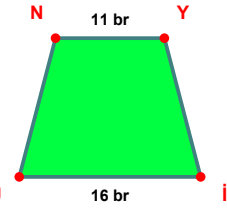
$$|ZÜ| - |ON| = \dots\dots\dots$$



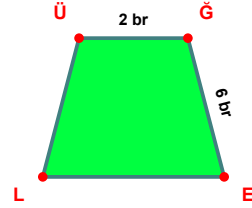
$$|PS| - |ÖP| = \dots\dots\dots$$



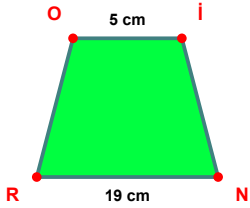
$$|BY| - |TB| = \dots\dots\dots$$



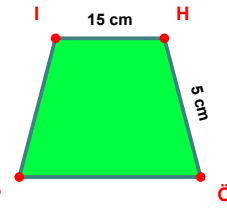
$$|Üİ| - |NY| = \dots\dots\dots$$



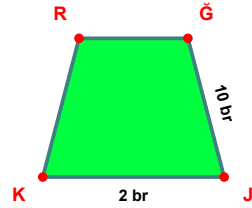
$$|GE| - |ÜĞ| = \dots\dots\dots$$



$$|NR| - |OI| = \dots\dots\dots$$



$$|IH| - |HÖ| = \dots\dots\dots$$



$$|ĞJ| - |JK| = \dots\dots\dots$$

SÜREÇ ODAKLI DEĞERLENDİRME ÖLÇEĞİ

Doğru Sayısı: / 24

Öğretmen ilgili kutucuğu işaretler.

Geliştirilmeli (0-8)

İyi (9-14)

Çok İyi (15-20)

Mükemmel (21-24)

☐☐☐☐

Hazırlayan:

Bu bölüme sınıfınızın ilgili kazanıma yönelik genel durumuna ilişkin gözlem ve izlenimlerinizi, öğrencilerinizin bu kazanımla ilgili öğrenme eksikliklerini ve bu eksikliklerin giderilmesi amacıyla yaptığınız/yapmayı planladığınız faaliyetleri not edebilirsiniz.

No	Adı - Soyadı	Toplam Puan	Değerlendirme
1			
2			
3			
4			
5			
6			
7			
8			
9			
10			
11			
12			
13			
14			
15			
16			
17			
18			
19			
20			
21			
22			
23			
24			
25			
26			
27			
28			
29			
30			
31			
32			
33			
34			
35			

Hazırlayan: